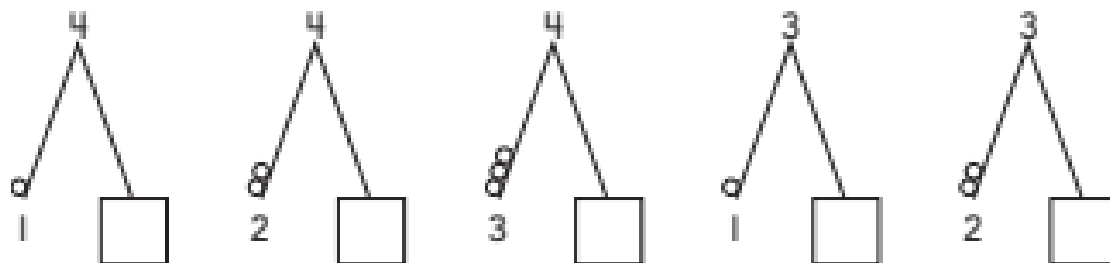
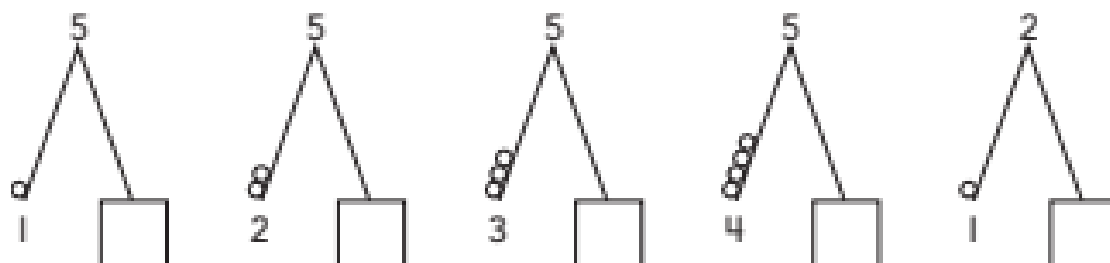
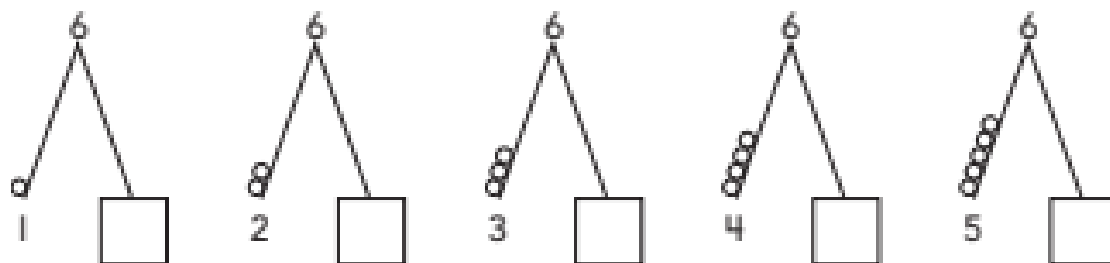
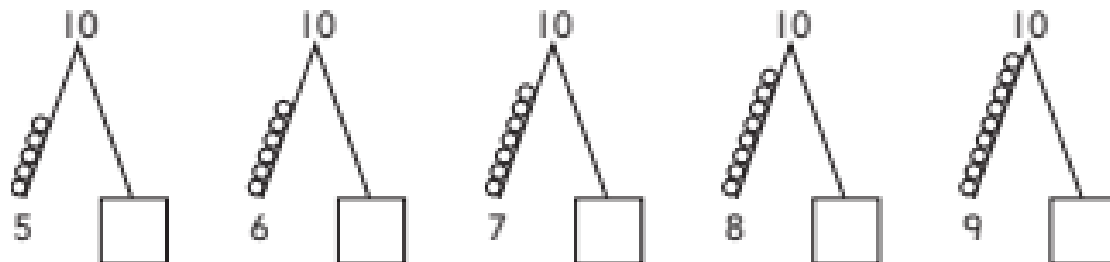


5-10
Practice

Name _____

Draw Tiny Tumblers on the Math Mountains.
Write the partners.

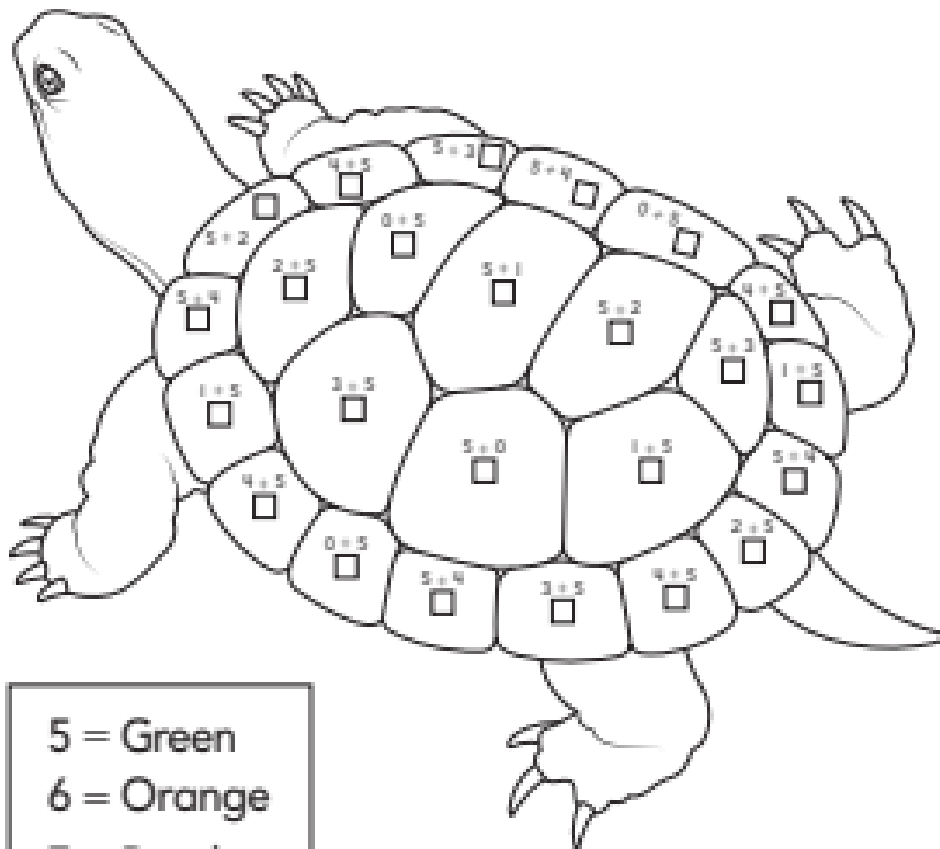


© Houghton Mifflin Harcourt Publishing Company

5-11
Practice

Name _____

Think 5-groups to find the totals.
Color each part of the shell.



- 5 = Green
- 6 = Orange
- 7 = Purple
- 8 = Red
- 9 = Blue

© Houghton Mifflin Harcourt Publishing Company

5-12
Practice

Name _____

Subtract the numbers. Use your fingers or draw.

$5 - 0 = \square$

$5 - 1 = \square$

$5 - 3 = \square$

$4 - 0 = \square$

$4 - 1 = \square$

$4 - 3 = \square$

$3 - 0 = \square$

$3 - 1 = \square$

$5 - 2 = \square$

$2 - 0 = \square$

$2 - 1 = \square$

$4 - 2 = \square$

$1 - 0 = \square$

$5 - 4 = \square$

$3 - 2 = \square$

Write the symbol to show equal or not equal.

= or \neq

© Houghton Mifflin Harcourt Publishing Company

$2 = 2 + 0$



$5 \neq 2 + 3$

$4 \neq 2 + 3$



$3 \neq 1 + 4$

$5 \neq 3 + 2$



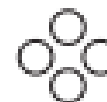
$1 \neq 0 + 2$

$1 \neq 2 + 1$



$2 \neq 3 + 0$

$3 \neq 1 + 2$



$4 \neq 3 + 1$